

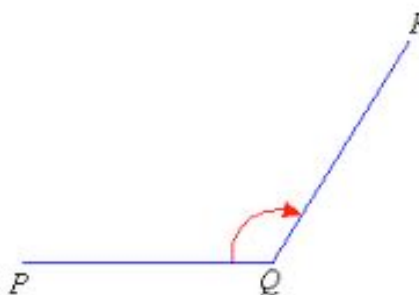
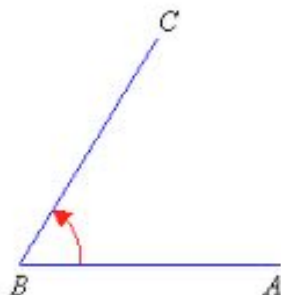


Year 7 Mathematics

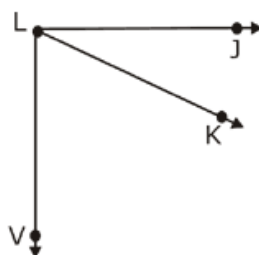
Angles Practice Test 1

Name _____

1 Name the angles pictured

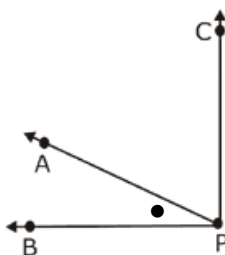


2 The figure below has three angles at vertex L. Name them

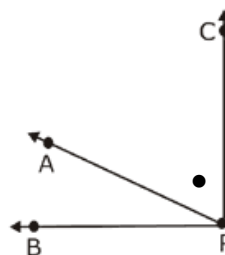


3 Name the angle marked with •

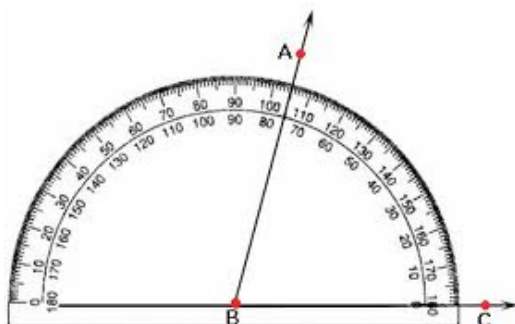
a)



b)



4 What is the size of $\angle ABC$



5 Classify the following angles

a)



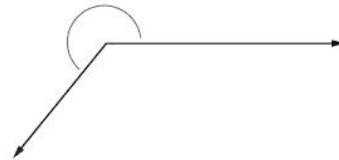
c)



b)



d)



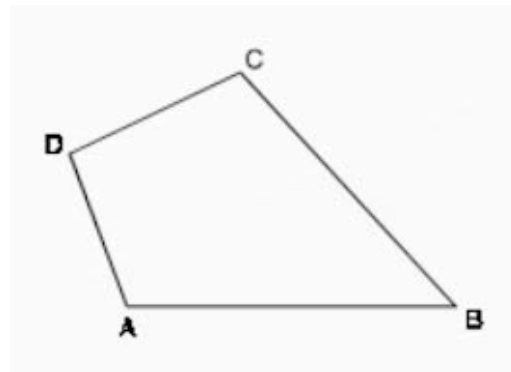
6 What is the type of angle is

a) $\angle ABC$

b) $\angle BCD$

c) $\angle CDA$

d) $\angle DAB$



7 What is the size of

a) a

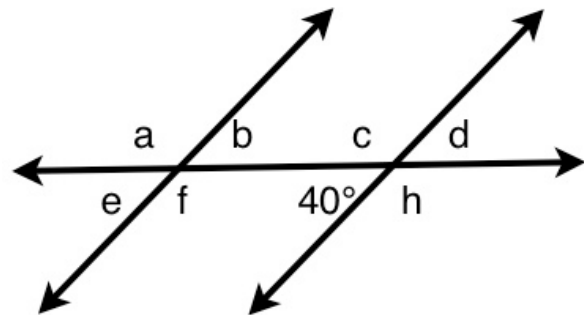
b) b

c) c

d) d

e) e

f) f



8 What is the value of x

