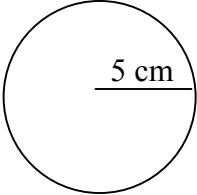
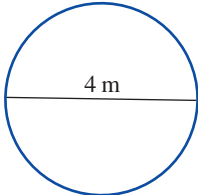
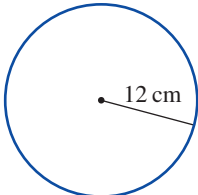
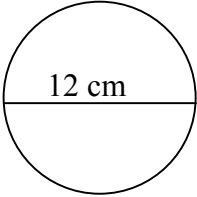
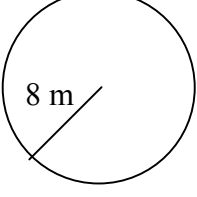
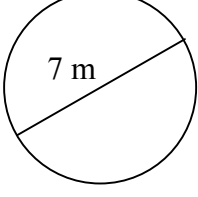
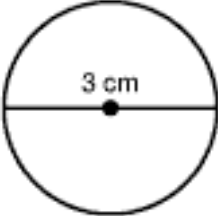
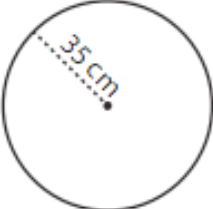
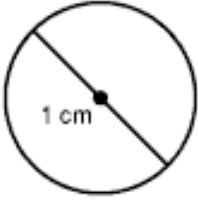




# Area of Circles

**1 Find the area of each circle, correct to 1 decimal place.**

<b>a</b> 	<b>b</b> 	<b>c</b> 
<b>d</b> 	<b>e</b> 	<b>f</b> 
<b>g</b> 	<b>h</b> 	<b>i</b> 

**2 Find the area of circles with the following measurements.  
Answer correct to 1 decimal place.**

<b>a</b> A diameter of 10 cm	<b>b</b> A radius of 6 mm	<b>c</b> A radius of 15 mm
<b>d</b> A radius of 6.5 m	<b>e</b> A diameter of 8 km	<b>f</b> A diameter of 12 cm